



Parts of a Group

 out of the 3  is gray.

Use . Color to show each fraction. Complete the sentence.

1. $\frac{1}{3}$ 

 out of the  is red.


2. $\frac{1}{2}$ 

 out of the  is red.

3. $\frac{1}{2}$ 

 out of the  is red.

4. $\frac{1}{4}$ 

 out of the  is red.

Problem Solving

5. Complete the sentence.
Circle the fraction that names the black part.

 out of the cars is black.

$\frac{1}{2}$

$\frac{1}{3}$

$\frac{1}{4}$

