




### Fact Family Neighborhood

Choose three numbers that can be used to write a fact family.  
Write the numbers on the houses.  
Complete the fact family.



<p>1.</p> 	<table style="margin: auto; border-collapse: collapse;"> <tr><td style="border: 1px solid black; padding: 5px;">4</td><td style="padding: 0 10px;">+</td><td style="border: 1px solid black; padding: 5px;">8</td><td style="padding: 0 10px;">=</td><td style="border: 1px solid black; padding: 5px;">12</td></tr> <tr><td style="border: 1px solid black; padding: 5px;">8</td><td style="padding: 0 10px;">+</td><td style="border: 1px solid black; padding: 5px;">4</td><td style="padding: 0 10px;">=</td><td style="border: 1px solid black; padding: 5px;">12</td></tr> <tr><td style="border: 1px solid black; padding: 5px;">12</td><td style="padding: 0 10px;">-</td><td style="border: 1px solid black; padding: 5px;">8</td><td style="padding: 0 10px;">=</td><td style="border: 1px solid black; padding: 5px;">4</td></tr> <tr><td style="border: 1px solid black; padding: 5px;">12</td><td style="padding: 0 10px;">-</td><td style="border: 1px solid black; padding: 5px;">4</td><td style="padding: 0 10px;">=</td><td style="border: 1px solid black; padding: 5px;">8</td></tr> </table>	4	+	8	=	12	8	+	4	=	12	12	-	8	=	4	12	-	4	=	8
4	+	8	=	12																	
8	+	4	=	12																	
12	-	8	=	4																	
12	-	4	=	8																	
<p>2.</p> 	<table style="margin: auto; border-collapse: collapse;"> <tr><td style="border: 1px solid black; height: 30px; width: 40px;"></td><td style="padding: 0 10px;">-</td><td style="border: 1px solid black; height: 30px; width: 40px;"></td><td style="padding: 0 10px;">=</td><td style="border: 1px solid black; height: 30px; width: 40px;"></td></tr> <tr><td style="border: 1px solid black; height: 30px; width: 40px;"></td><td style="padding: 0 10px;">-</td><td style="border: 1px solid black; height: 30px; width: 40px;"></td><td style="padding: 0 10px;">=</td><td style="border: 1px solid black; height: 30px; width: 40px;"></td></tr> <tr><td style="border: 1px solid black; height: 30px; width: 40px;"></td><td style="padding: 0 10px;">+</td><td style="border: 1px solid black; height: 30px; width: 40px;"></td><td style="padding: 0 10px;">=</td><td style="border: 1px solid black; height: 30px; width: 40px;"></td></tr> <tr><td style="border: 1px solid black; height: 30px; width: 40px;"></td><td style="padding: 0 10px;">+</td><td style="border: 1px solid black; height: 30px; width: 40px;"></td><td style="padding: 0 10px;">=</td><td style="border: 1px solid black; height: 30px; width: 40px;"></td></tr> </table>		-		=			-		=			+		=			+		=	
	-		=																		
	-		=																		
	+		=																		
	+		=																		
<p>3.</p> 	<table style="margin: auto; border-collapse: collapse;"> <tr><td style="border: 1px solid black; height: 30px; width: 40px;"></td><td style="padding: 0 10px;">+</td><td style="border: 1px solid black; height: 30px; width: 40px;"></td><td style="padding: 0 10px;">=</td><td style="border: 1px solid black; height: 30px; width: 40px;"></td></tr> <tr><td style="border: 1px solid black; height: 30px; width: 40px;"></td><td style="padding: 0 10px;">+</td><td style="border: 1px solid black; height: 30px; width: 40px;"></td><td style="padding: 0 10px;">=</td><td style="border: 1px solid black; height: 30px; width: 40px;"></td></tr> <tr><td style="border: 1px solid black; height: 30px; width: 40px;"></td><td style="padding: 0 10px;">-</td><td style="border: 1px solid black; height: 30px; width: 40px;"></td><td style="padding: 0 10px;">=</td><td style="border: 1px solid black; height: 30px; width: 40px;"></td></tr> <tr><td style="border: 1px solid black; height: 30px; width: 40px;"></td><td style="padding: 0 10px;">-</td><td style="border: 1px solid black; height: 30px; width: 40px;"></td><td style="padding: 0 10px;">=</td><td style="border: 1px solid black; height: 30px; width: 40px;"></td></tr> </table>		+		=			+		=			-		=			-		=	
	+		=																		
	+		=																		
	-		=																		
	-		=																		



Choose three numbers of your own. Write the fact family.